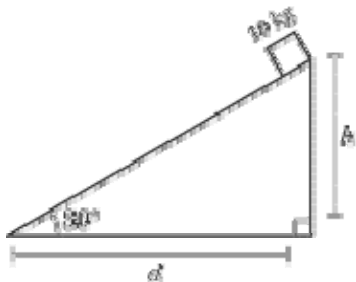


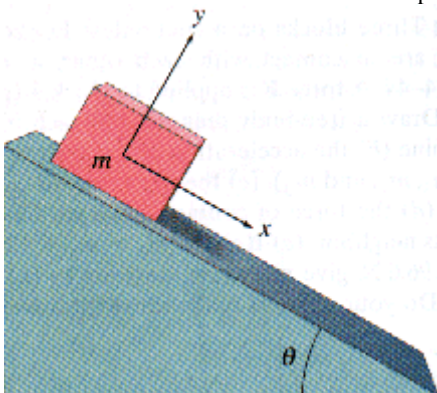
Calculating the Normal and Parallel Forces

Solve the following problems

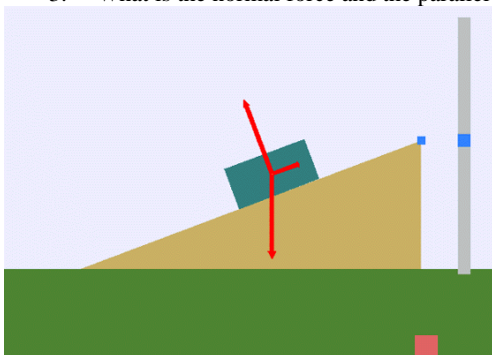
1. What is the normal force and the parallel force of 10 kg block sitting on a 30° incline?



2. What is the normal force and the parallel force of 10 kg block sitting on a 40° incline?



3. What is the normal force and the parallel force of 10 kg block sitting on a 10° incline?



4. What is the normal force and the parallel force of 10 kg block sitting on a 45° incline?

